



**World Class Tests®**

challenging **minds**, recognising **talent™**



# World Class Tests

## Sample Questions

## Mathematics



8-11 year olds



WORLD CLASS ARENA LIMITED

# 1

Write in this table what the numbers could be.

Number	Rounded to the nearest 10	Rounded to the nearest 100
	150	200
	250	200

☐


Q1.1  
2 marks

☐

Q1.2  
2 marks

2

A **ball** and a **cube** together weigh 170 grams.



**Three balls and two cubes** weigh 420 grams.



What is the weight of one **cube**?



\_\_\_\_\_ grams

Show your working.

☐

Q.2  
2 marks